

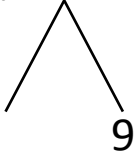


NAME _____ DATE _____

ADDITION OF TWO DIGIT NUMBERS

Solve using number bonds. Write the two number sentences that show that you added the ten first. Draw quick tens and ones.

a) $19 + 12 = \underline{\quad}$

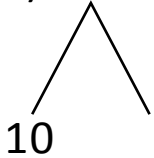


+ 

$12 + 10 = \underline{\quad}$

$\underline{\quad} + 9 = \underline{\quad}$

b) $17 + 21 = \underline{\quad}$

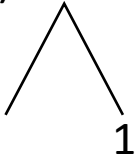


+ 

$21 + 10 = \underline{\quad}$

$\underline{\quad} + 7 = \underline{\quad}$

c) $11 + 26 = \underline{\quad}$

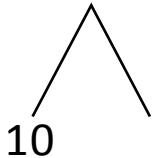


+ 

$26 + 10 = \underline{\quad}$

$\underline{\quad} + 1 = \underline{\quad}$

d) $22 + 13 = \underline{\quad}$



+ 

$22 + 10 = \underline{\quad}$

$\underline{\quad} + 3 = \underline{\quad}$